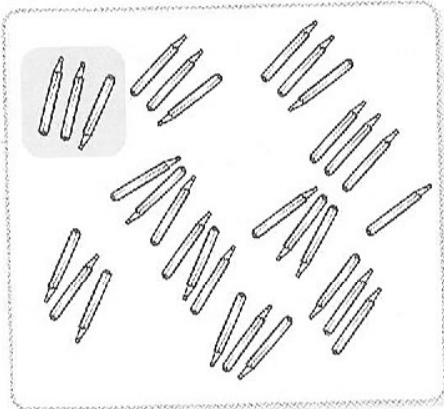
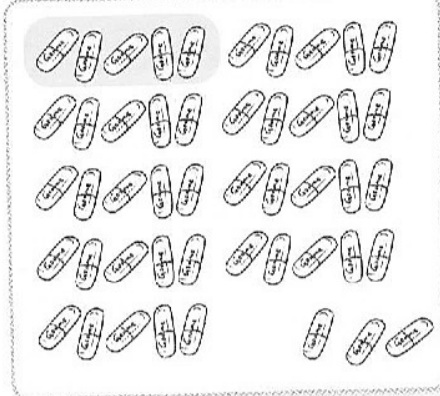


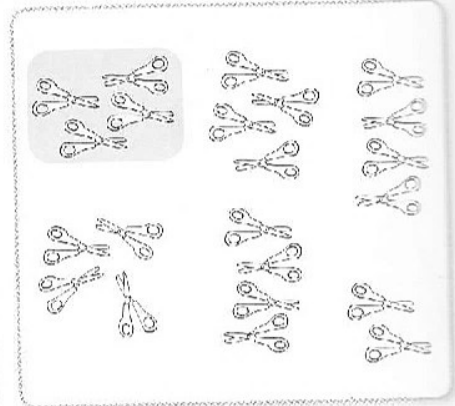
**1** Continue les groupements et complète les égalités.



$$31 = ( \quad \times \quad ) + \quad$$

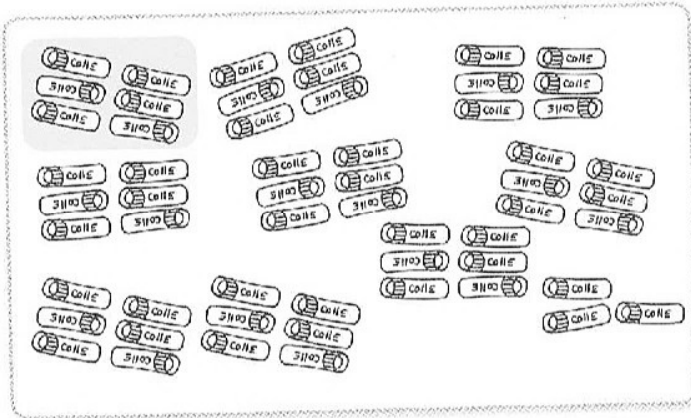


$$48 = ( \quad \times \quad ) + \quad$$

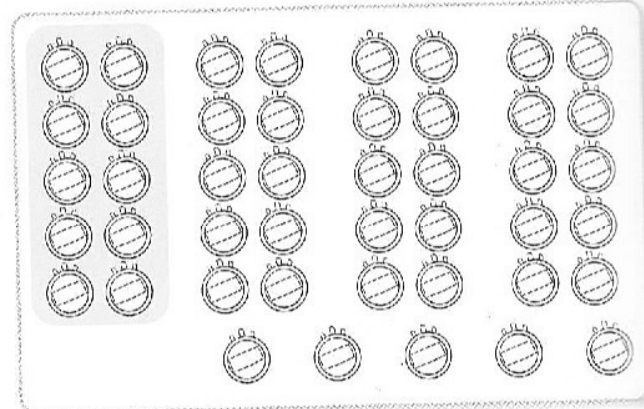


$$22 = ( \quad \times \quad ) + \quad$$

**2** Continue les groupements et complète les égalités.



$$57 = ( \quad \times \quad ) + \quad$$



$$45 = ( \quad \times \quad ) + \quad$$

**3** Complète les égalités.

$$30 = 6 \times \quad$$

$$45 = 9 \times \quad$$

$$60 = 10 \times \quad$$

$$34 = (6 \times \quad) + \quad$$

$$43 = (10 \times \quad) + \quad$$

$$54 = (10 \times \quad) + \quad$$

$$75 = ( \quad \times 10 ) + \quad$$

$$51 = ( \quad \times \quad ) + 2$$

$$35 = ( \quad \times 4 ) + 3$$